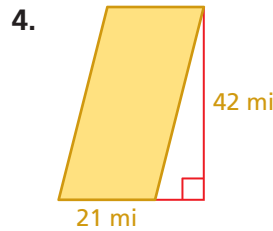
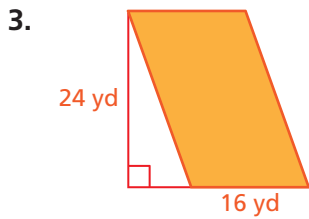
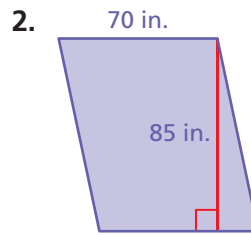
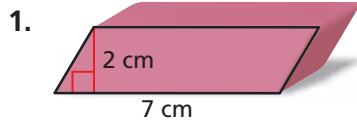
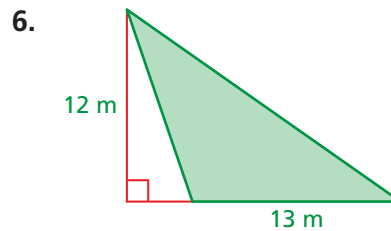
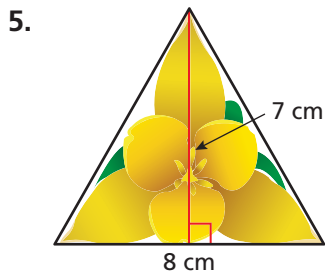


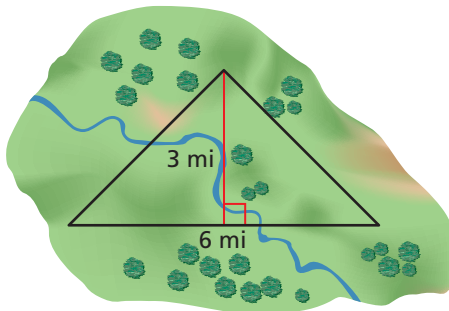
Find the area of the parallelogram. (Section 4.1)



Find the area of the triangle. (Section 4.2)



7. **LAND** A wildlife conservation group buys a plot of land. How much land does it buy? (Section 4.2)



8. **FRAMING** A sheet of plywood is 4 feet wide by 8 feet long. What is the minimum number of sheets of plywood needed to cover the frame? Justify your answer. (Section 4.2)

