

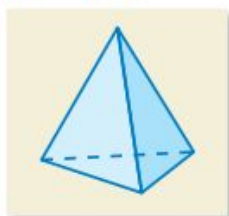
8.3 Exercises



Vocabulary and Concept Check

1. **PRECISION** Explain how to find the surface area of a pyramid.

2. **WHICH ONE DOESN'T BELONG?** Which figure does *not* belong with the other three? Explain your reasoning.



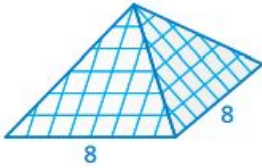


Practice and Problem Solving

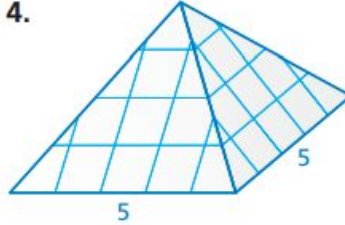
Draw a net of the square pyramid. Then find the surface area of the pyramid.

Draw the nets on your grid. Label them # 3, 4, & 5.

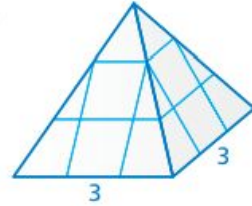
3.



4.



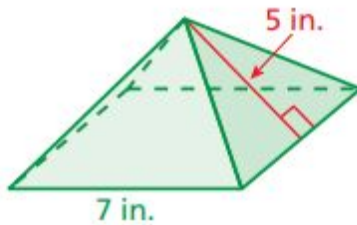
5.



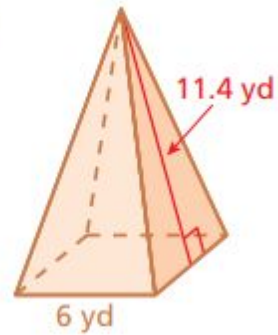
Find the surface area of the pyramid. The side lengths of the base are equal.

1

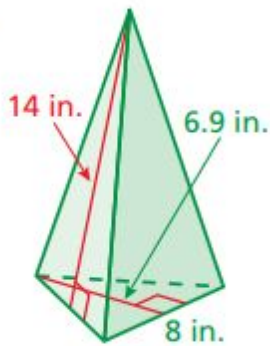
6.



7.



10.



18. _____

19. _____

